



ROLL NO.	
NAME	
CLASS & SECTION	

APEEJAY COMMON PRE-BOARD EXAMINATION, 2019-20

05

CLASS-X

SOCIAL SCIENCE (087)

Time allowed : 3 hrs.

Maximum Marks : 80

**General Instructions :**

1. The question paper has 35 questions in all.
2. Marks are indicated against each question.
3. Questions from serial number 1 to 20 are objective type questions. Each question carries one mark. Answer them as instructed.
4. Questions from serial number 21 to 28 are 3 marks questions. Answer of these questions should not exceed 80 words each.
5. Questions from serial number 29 to 34 are 5 marks questions. Answer of these questions should not exceed 120 words each.
6. Question number 35 is a map question of 6 marks with two parts - 35 a. from History (2 marks) and 35b. from Geography (4 marks)

**VERY SHORT ANSWER QUESTIONS**

1. Who was the Viceroy of colonial India in 1930? (1)  
A. Lord Irwin  
B. Lord Mountbatten  
C. Motilal Nehru  
D. Mahatma Gandhi
2. Which of the following statement is/are incorrect : (1)  
(i) In Britain formation of a nation state was a long parliamentary process.  
(ii) Napoleonic code upholds reforms and equality  
(iii) Mazzini was a great revolutionary leader of Romania.  
(iv) Treaty of Constantinople recognized Italy as an Independent nation.

P.T.O.

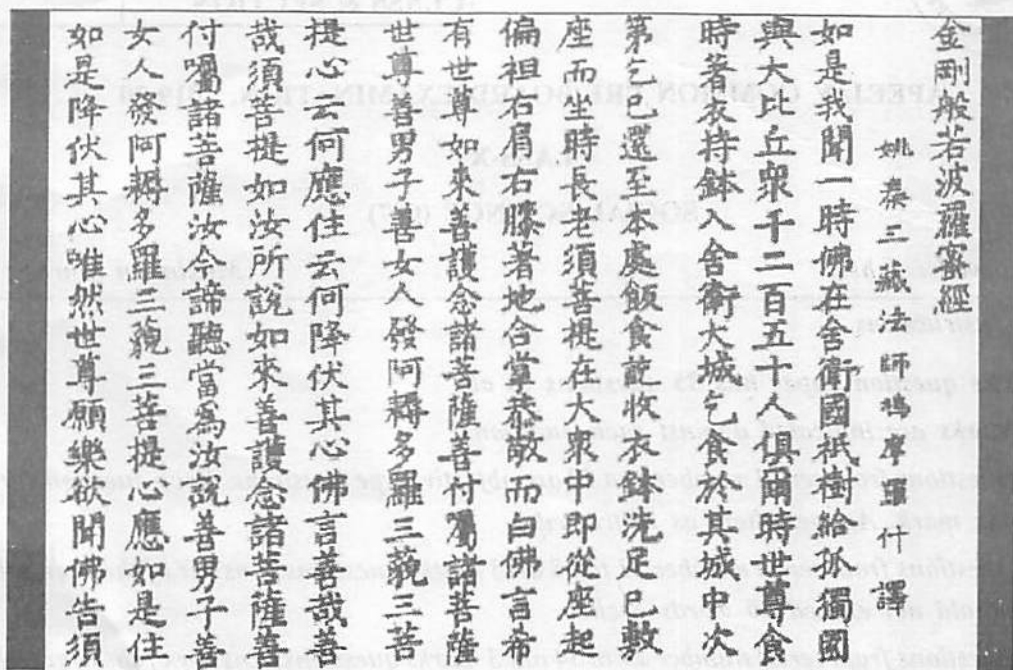
A. 1, 2, 3, 4

B. 3, 4

C. 1, 4

D. 1, 2, 4

3. Identify the image and write its name.



4. By late 19<sup>th</sup> century, British manufacturers were printing \_\_\_\_\_ to popularize their products. (1)

5. In the question given below, there are two statements marked as Assertion (A) and Reason (R). Read the statements and chose the correct option : (1)

I. Plantation has an interface of agriculture and industry.

II. Plantation is a type of commercial farming; a single crop is grown on a large area.

Options :

A. Both A and R is true and R is the correct explanation of A.

B. Both A and R is true but R is not the correct explanation of A.

C. A is correct but R is wrong.

D. A is wrong but R is correct.

6. Which state among the North-East states has been fully surveyed for its land use? (6)

A. Arunachal Pradesh


B. Assam

C. Manipur

D. Mizoram



11. This cartoon offers an understanding of which of the following statement : (1)



- A. One third of seats in local governing bodies- in Panchayats and municipalities – are now reserved for women.  
B. Now there are more than ten lakhs elected women representatives in rural and urban local bodies.  
C. A bill with the proposal of reservation of one third-of seats.in the Lok Sabha is still pending.  
D. Gender division needs to be expressed in politics.
12. Call Centre Employee will be classified working under which economic activity?  
A. Primary  
B. Tertiary  
C. Secondary  
D. Industrial
13. In India, who issues currency notes on behalf of the Central Government? (1)  
A. State Bank of India  
B. President of India  
C. Reserve Bank of India  
D. Supreme Court of India
14. Choose the correct option : (1)  
Globalization, by connecting countries, shall result in :  
A. Lesser competition among producers.  
B. Greater competition among producers.  
C. No change in competition among producers  
D. Conflicts and Wars

15. Riya has taken a loan of Rs. 7 lakhs from the bank to purchase a car. The annual interest rate on the loan is 14.5 per cent and the loan is to be repaid in 3 years in monthly installments. The bank retained the papers of the new car as collateral, which will be returned to Rita only when she repays the entire loan with interest. Analyze the loan information given above, considering one of the following correct option.

- |                       |                     |     |
|-----------------------|---------------------|-----|
| A. Mode of re-payment | B. Terms of credit  |     |
| C. Interest on loan   | D. Deposit criteria | (1) |

16. What is a Cheque? (1)

17. Write the full form of NABARD. (1)

18. Raghav has surplus money so he opens a bank account and deposits in it. Whenever he needs money, he can go to his bank and withdraw from there. This kind of deposit with the banks is known as : (1)

- |                   |                    |
|-------------------|--------------------|
| A. demand deposit | B. term deposit    |
| C. fixed deposit  | D. surplus deposit |

19. A trader provides farm inputs on credit on the condition that farmers will sell their crop produce to him at ..... prices so that he could sell them at ..... prices in the market. (1)

- |                 |              |
|-----------------|--------------|
| A. high, medium | B. low, high |
| C. medium, high | D. high, low |

20. Development of an Individual refers to : (1)

- |                         |                          |
|-------------------------|--------------------------|
| A. Over all Development | B. Physical Development  |
| C. Mental Development   | D. Spiritual Development |

**OR**

Per Capita Income of different Countries is counted in which Currency?

- |                    |         |
|--------------------|---------|
| A. US Dollar       | B. INR  |
| C. Canadian Dollar | D. Yuan |

**SHORT ANSWER QUESTIONS**

21. In what ways Non Cooperation Movement different from Civil Disobedience Movement? (3)

**OR**

How was Nationalism in India linked to Anti Colonial Movement?

22. Why Manchester could never regain its lost position in Colonial India? (3)

**OR**

“Printed books at first closely resembled the written manuscripts.” Elaborate the statement

(3)

23. Read the source given below and answer the questions that follows :

By the mid-eighteenth century, there was a common conviction that books were a means of spreading progress and enlightenment. Many believed that books could change the world, liberate society from despotism and tyranny, and herald a time when reason and intellect would rule. Louise-Sebastian Mercier, a novelist in eighteenth-century France, declared: ‘The printing press is the most powerful engine of progress and public opinion is the force that will sweep despotism away.’ In many of Mercier’s novels, the heroes are transformed by acts of reading. They devour books, are lost in the world books create, and become enlightened in the process. Convinced of the power of print in bringing enlightenment and destroying the basis of despotism, Mercier proclaimed : ‘Tremble, therefore, tyrants of the world! Tremble before the virtual writer!’

**QUESTIONS :**

A. Who was Mercier? (1)

B. Whom he warned and why? (2)

24. Why is electricity considered as index of development? Also give one difference between Hydroelectricity and Thermal electricity. (3)

**OR**

Bring out the stages of resource planning in India

25. Compare and contrast the ethnic composition of Belgium with that of Sri Lanka. (3)

26. Does delay and deliberation considered as a flaw to democracy? Justify. (3)

27. Do you agree that agriculture in India is an unorganized sector activity? Why? Why not? (3)

28. What is a Credit? How can it be positive or negative with its role? Explain with example. (3)

**LONG ANSWER QUESTIONS**

29. In what ways Habsburg Empire was a patchwork of many different regions and people? (5)

**OR**

Explain with the help of examples how culture played an important role in the creation of nation states in Europe.

30. Read the Extract and answer the questions that follows :

While spinning continues to be centralized in Maharashtra, Gujarat and Tamil Nadu,

weaving is highly decentralized to provide scope for incorporating traditional skills and designs of weaving in cotton, silk, zari, embroidery, etc. India has world class production in spinning, but weaving supplies low quality of fabric as it cannot use much of the high quality yarn produced in the country. Weaving is done by handloom, power loom and in mills. The handspun khadi provides large scale employment to weavers in their homes as a cottage industry. Although, we have made significant increase in the production of good quality long staple cotton, the need to import is still felt. Power supply is erratic and machine needs to be upgraded in the weaving and processing sectors in particular. Other problems are the low output of labour and stiff competition with the synthetic fibre industry.

### QUESTIONS

1. Why did Mahatma Gandhi emphasize on spinning yarn and weaving khadi? (1)
2. Why is it important for our country to keep the mill sector loom age lower than power loom and handloom? (1)
3. Bring out the three challenges faced in this Industry. (3)
31. Throw light on the classification of Roadways in India on the basis of Capacity. (5)
32. Why religion and Politics go hand in hand? Also explain any three forms of communalism in politics? (5)
33. Bring out three challenges faced by Political Parties in India. Also suggest any two measures to reform political parties. (5)
34. What are trade barriers? Why were they imposed by the Government of India after Independence and then why removed after 1991? (5)

### MAP SKILL BASED QUESTIONS

**35.A. Two places A and B have been marked on the given outline political map of India.**

**Identify them and write their names on the lines drawn near them.**

(i) The place where pledge for Purna Swaraj was taken. (1)

(ii) The place where first local experiment was launched by Gandhi in 1916. (1)

**B. On the same outline political map of India locate and label the following :** (4)

(i) Extreme South-Eastern port in Tamil Nadu

(ii) Software Technology Park in Kerala

(iii) Netaji Subhash Chandra Bose Air port

(iv) Oil field in Gujarat

**35. Outline Political Map of India**

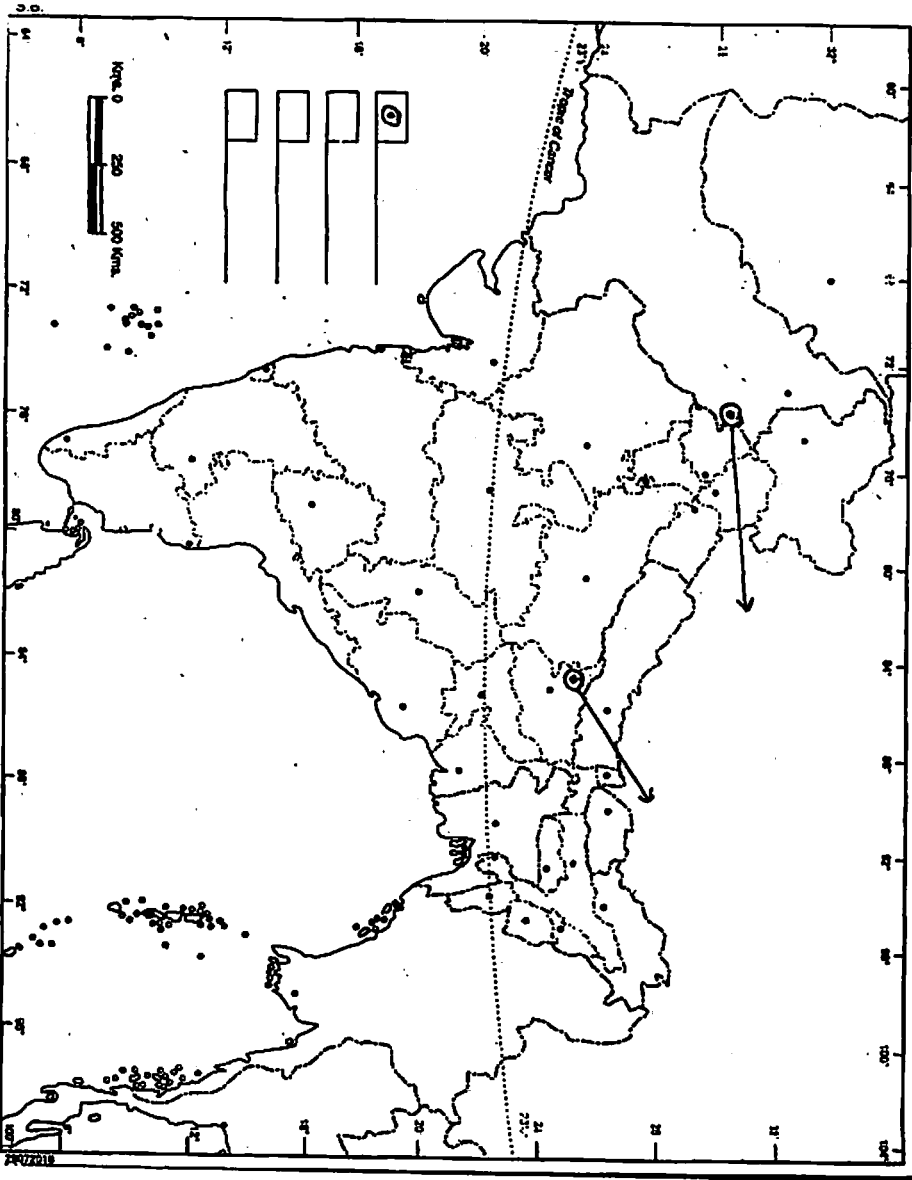
**BEST OF LUCK!**

**INDIA**

**POLITICAL AND ADJACENT COUNTRIES**

**भारत**

**राज्यांचे व नजदीकी देश**



(8) J.W.C.-X



